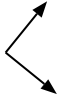




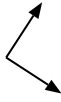
Determine if the angle shown is 'less', 'more' or 'equal' to 90°.

Answers

Ex)



1)



2)



Ex. equal

1. \_\_\_\_\_

2. \_\_\_\_\_

3)



4)



5)



3. \_\_\_\_\_

4. \_\_\_\_\_

5. \_\_\_\_\_

6)



7)



8)

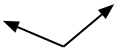


6. \_\_\_\_\_

7. \_\_\_\_\_

8. \_\_\_\_\_

9)



10)



11)



9. \_\_\_\_\_

10. \_\_\_\_\_

11. \_\_\_\_\_

12)



13)



14)



12. \_\_\_\_\_

13. \_\_\_\_\_

14. \_\_\_\_\_

15)



16)



17)



15. \_\_\_\_\_

16. \_\_\_\_\_

17. \_\_\_\_\_

18)



19)



20)



18. \_\_\_\_\_

19. \_\_\_\_\_

20. \_\_\_\_\_



Determine if the angle shown is 'less', 'more' or 'equal' to 90°.

Ex)



1)



2)



Answers

Ex. equal

1. equal

2. less

3. less

4. more

5. more

6. less

7. less

8. less

9. more

10. equal

11. more

12. less

13. equal

14. equal

15. equal

16. more

17. more

18. less

19. equal

20. less

3)



4)



5)



6)



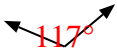
7)



8)



9)



10)



11)



12)



13)



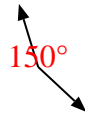
14)



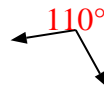
15)



16)



17)



18)



19)



20)

